

GLO	/2
HW	/8

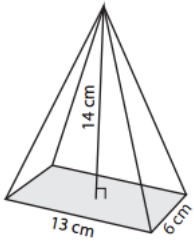
Name: _____

Date: _____ Pd: _____

Volume: Rectangular & Triangular Pyramids HOMEWORK

Find the **VOLUME** for the following pyramids ($V = \frac{1}{3}Bh$). Be sure to show work!

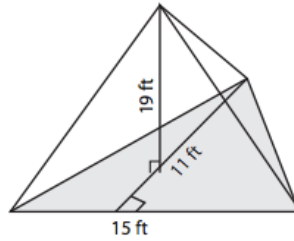
1)



Base Shape (Circle one):
Rectangle OR Triangle

Volume= _____

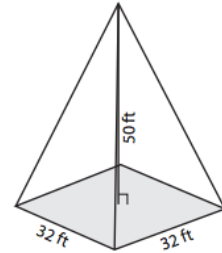
2)



Base Shape (Circle one):
Rectangle OR Triangle

Volume= _____

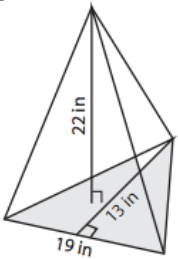
3)



Base Shape (Circle one):
Rectangle OR Triangle

Volume= _____

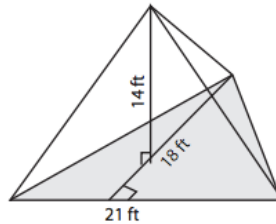
4)



Base Shape (Circle one):
Rectangle OR Triangle

Volume= _____

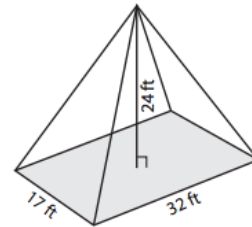
5)



Base Shape (Circle one):
Rectangle OR Triangle

Volume= _____

6)



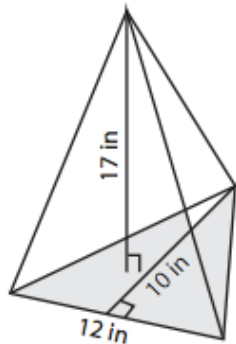
Base Shape (Circle one):
Rectangle OR Triangle

Volume= _____

7)

Base Shape (Circle one):
Rectangle OR Triangle

Volume= _____



8)

Base Shape (Circle one):
Rectangle OR Triangle

Volume= _____

