

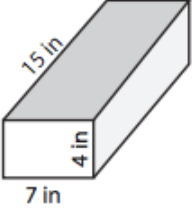
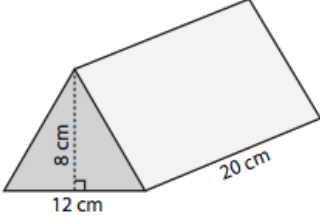
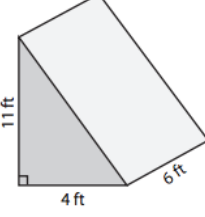

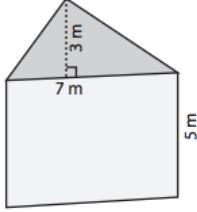
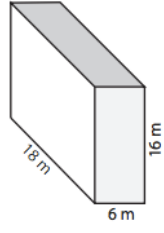
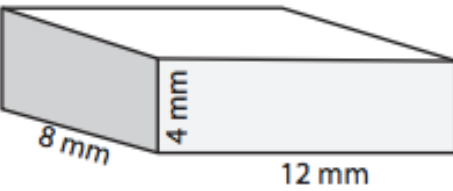
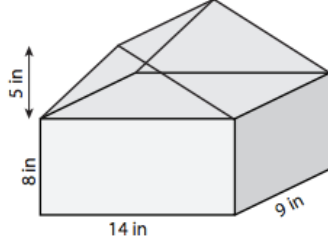
GLO	/2
HW	/8

Name: \_\_\_\_\_

Date: \_\_\_\_\_ Pd: \_\_\_\_\_

## Volume: Rectangular & Triangular Prisms HOMEWORK

Find the **VOLUME** for the following prisms ( $V=Bh$ ). Be sure to show work!

<p>1)</p>  <p><b>Base Shape</b> (Circle one): Rectangle OR Triangle</p> <p><b>Volume</b>= _____</p>	<p>2)</p>  <p><b>Base Shape</b> (Circle one): Rectangle OR Triangle</p> <p><b>Volume</b>= _____</p>	<p>3)</p>  <p><b>Base Shape</b> (Circle one): Rectangle OR Triangle</p> <p><b>Volume</b>= _____</p>
<p>4)</p>  <p><b>Base Shape</b> (Circle one): Rectangle OR Triangle</p> <p><b>Volume</b>= _____</p>	<p>5)</p>  <p><b>Base Shape</b> (Circle one): Rectangle OR Triangle</p> <p><b>Volume</b>= _____</p>	<p>6)</p>  <p><b>Base Shape</b> (Circle one): Rectangle OR Triangle</p> <p><b>Volume</b>= _____</p>
<p>7)</p>  <p><b>Base Shape</b> (Circle one): Rectangle OR Triangle</p> <p><b>Volume</b>= _____</p>		<p>8)</p>  <p><b>Base Shape</b> (Circle one): Rectangle OR Triangle</p> <p><b>Volume</b>= _____</p>