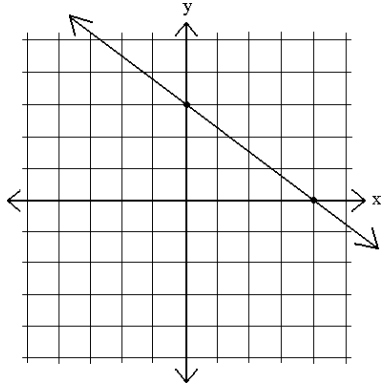


Name: _____

Date: _____ Pd: _____

**Slope-Intercept: GRAPH
MINI QUIZ**

Determine the slope-intercept equation ($y=mx+b$)
of the following graph.



Slope: _____ y-intercept: _____

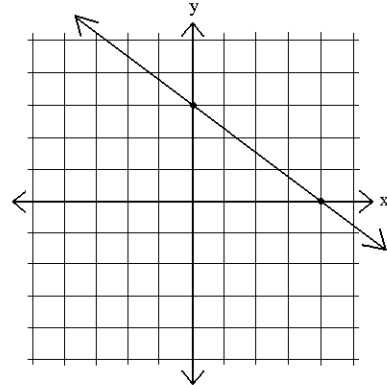
Slope-Intercept Equation: _____

Name: _____

Date: _____ Pd: _____

**Slope-Intercept: GRAPH
MINI QUIZ**

Determine the slope-intercept equation ($y=mx+b$)
of the following graph.



Slope: _____ y-intercept: _____

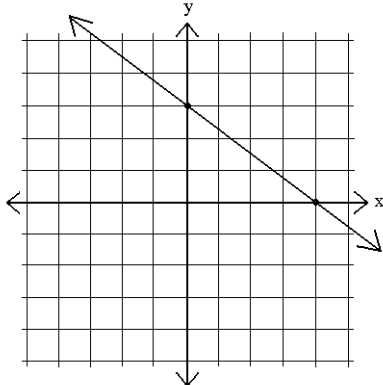
Slope-Intercept Equation: _____

Name: _____

Date: _____ Pd: _____

**Slope-Intercept: GRAPH
MINI QUIZ**

Determine the slope-intercept equation ($y=mx+b$)
of the following graph.



Slope: _____ y-intercept: _____

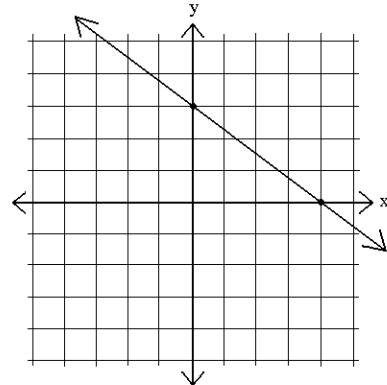
Slope-Intercept Equation: _____

Name: _____

Date: _____ Pd: _____

**Slope-Intercept: GRAPH
MINI QUIZ**

Determine the slope-intercept equation ($y=mx+b$)
of the following graph.



Slope: _____ y-intercept: _____

Slope-Intercept Equation: _____