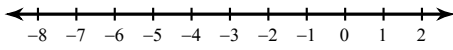


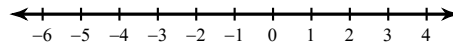
Multi-Step Inequalities

Solve each inequality and graph its solution.

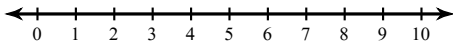
1) $3 < -5n + 2n$



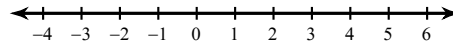
2) $6x + 2 + 6x < 14$



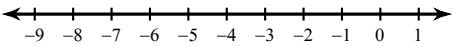
3) $-p - 4p > -10$



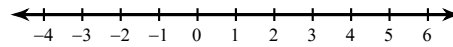
4) $18 \geq 5k + 4k$



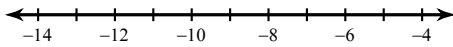
5) $9 \geq -2m + 2 - 3$



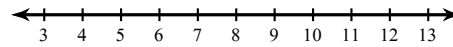
6) $-3 - 6(4x + 6) > -111$



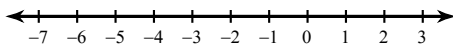
7) $6 - 4(6n + 7) \geq 122$



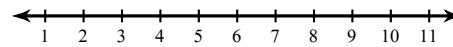
8) $-138 \geq -6(6b - 7)$



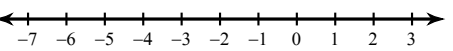
9) $167 < 6 + 7(2 - 7r)$



10) $5(6 + 3r) + 7 \geq 127$



11) $-8x + 2x - 16 < -5x + 7x$



12) $-1 - 6x - 6 > -11 - 7x$

