

GLO	/2
HW	/8

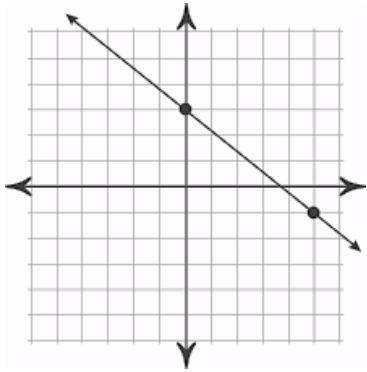
Name: _____

Date: _____ Pd: _____

Slope-Intercept: Graphs, Tables, & Two Points Study Guide

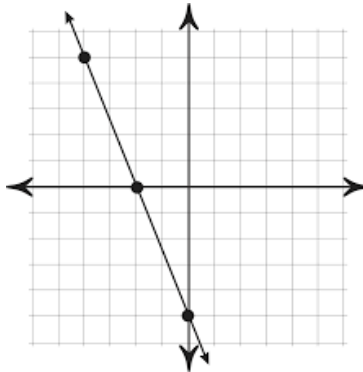
Find slope-intercept form from the following *GRAPHS, TABLES, and 2 POINTS*.

1)



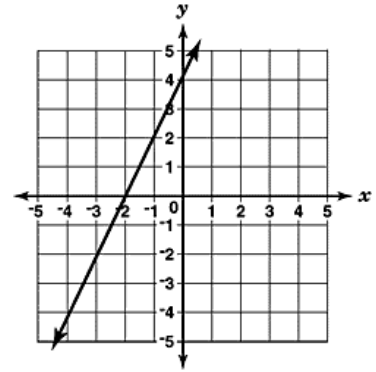
Equation: _____

2)



Equation: _____

3)



Equation: _____

4)

Equation: _____

x	y
-2	5
0	1
2	-3

5)

Equation: _____

x	y
3	-4
6	-5
9	-6

6) $(2, 4)$ and $(0, 9)$

Equation: _____

7) $(0, 6)$ and $(2, 0)$

Equation: _____

8) $(0, 3)$ and $(8, -15)$

Equation: _____