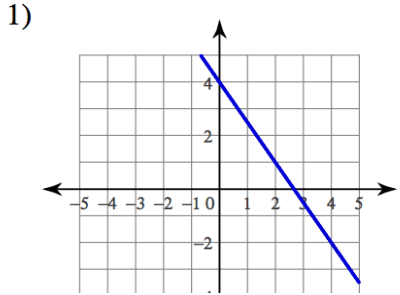


GLO	/2
HW	/8

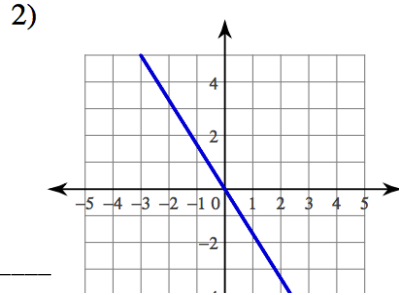
Name: _____ Date: _____ Pd: _____

Linear Equations: Graphs

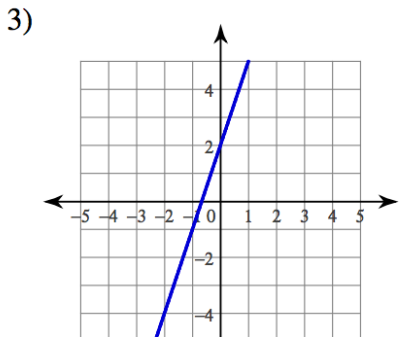
Find slope, y-intercept, and equation for the following GRAPHS (Remember to use rise/run).



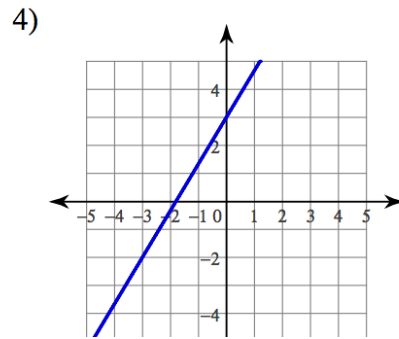
slope: _____
y-intercept: _____
equation: _____



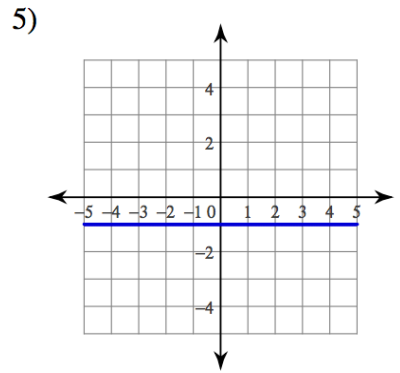
slope: _____
y-intercept: _____
equation: _____



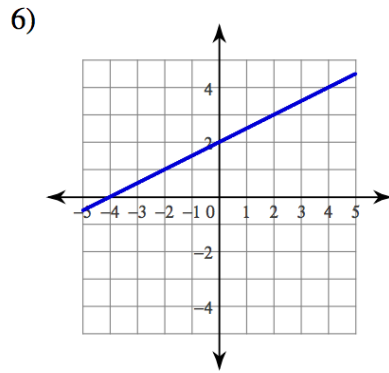
slope: _____
y-intercept: _____
equation: _____



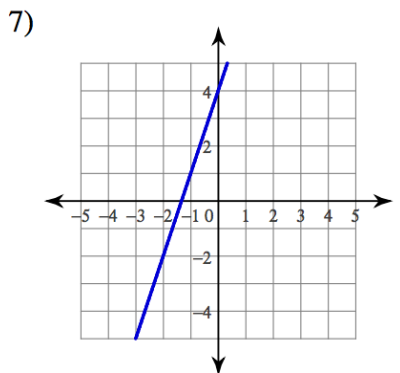
slope: _____
y-intercept: _____
equation: _____



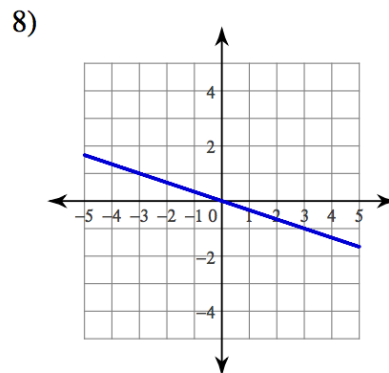
slope: _____
y-intercept: _____
equation: _____



slope: _____
y-intercept: _____
equation: _____



slope: _____
y-intercept: _____
equation: _____



slope: _____
y-intercept: _____
equation: _____