

**Topic:**



**Name:** \_\_\_\_\_

**Date:** \_\_\_\_\_ **Pd** \_\_\_\_\_

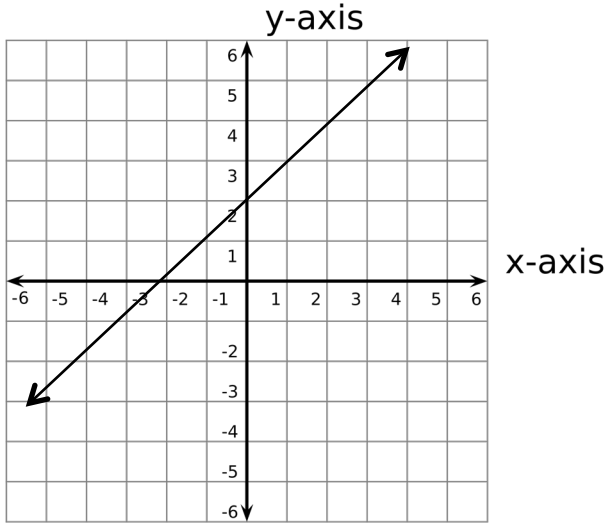
**EQ:**

**Questions/Key Ideas**

**Notes**

What is a y-intercept?

y-intercept: The \_\_\_\_\_ on your graph that



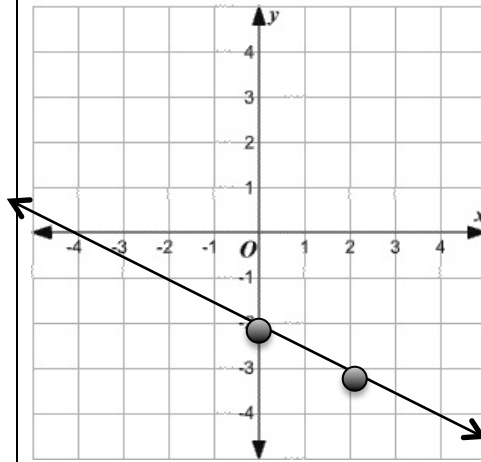
What is slope-intercept form?

• Linear equation that identifies the \_\_\_\_\_ &

\_\_\_\_\_

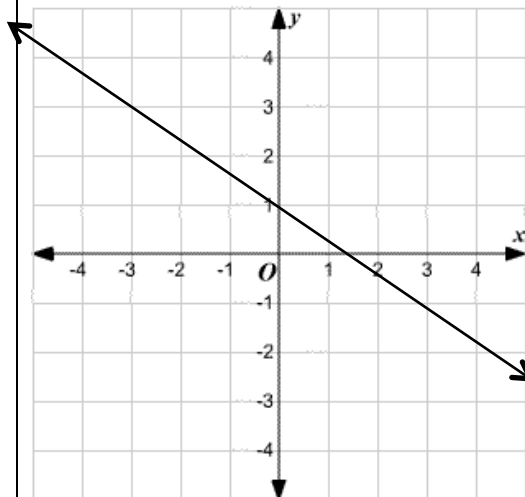
$$y = mx + b$$

Find the equation of the following graph?



How do you find points on a line to create an equation  $y=mx+b$ ?

- Find the \_\_\_\_\_ and \_\_\_\_\_ other point on a “\_\_\_\_\_” of the grid line



Summary: