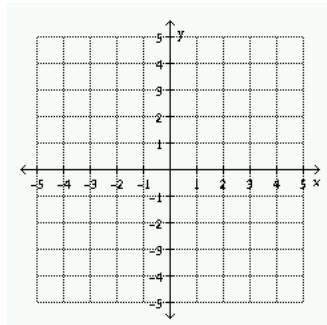


Name: _____

Date: _____ Pd: _____

GRAPHING VS. SUBSTITUTION

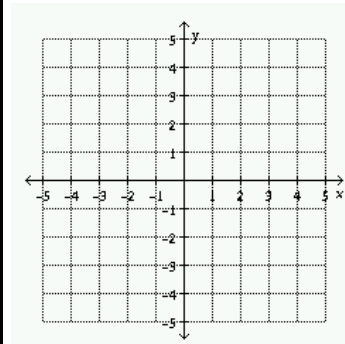
1. $y = x + 2$
 $x = -3$



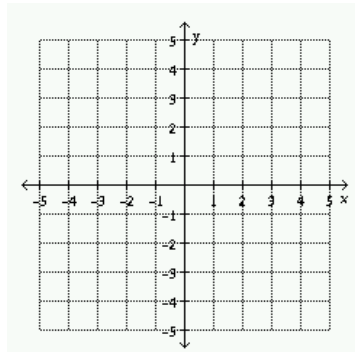
1. $y = x + 2$
 $x = -3$

2. $x + y = 2$
 $2x - y = 1$

2. $x + y = 2$
 $2x - y = 1$



3. $4x - 3y = 15$
 $y = \frac{4}{3}x - 7$



3. $4x - 3y = 15$
 $y = \frac{4}{3}x - 7$