

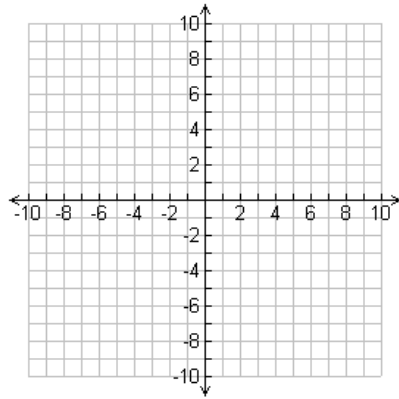
Name: _____

Date: _____ Pd: _____

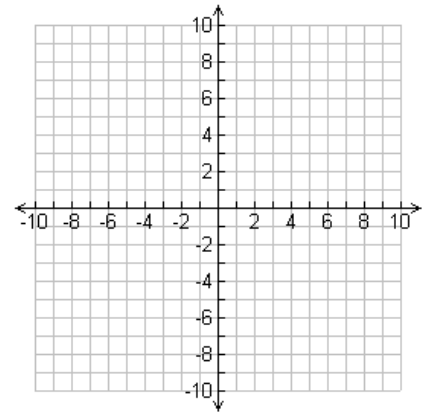
Mission 1: Graphing Linear Equations Practice Worksheet

Graph the following linear equations.

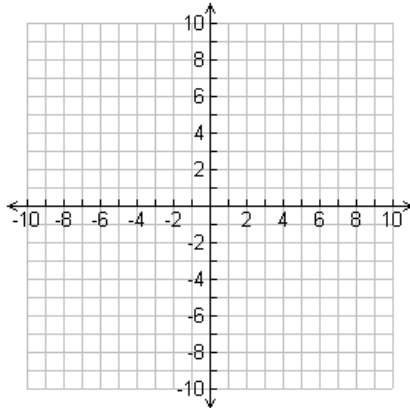
$$y = \frac{2}{3}x + 1$$



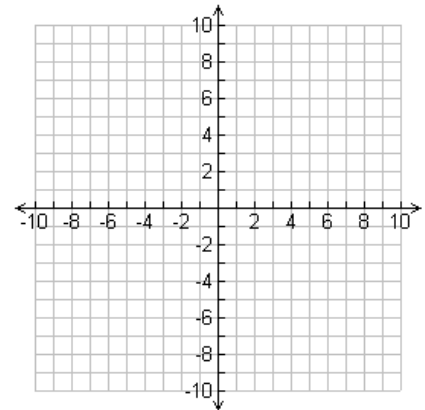
$$y = \frac{3}{2}x - 5$$



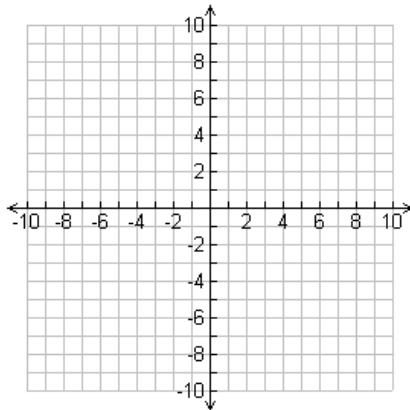
$$y = -\frac{4}{5}x + 3$$



$$y = -\frac{1}{5}x - 2$$



$$y = 2x - 1$$



$$y = -3x + 6$$

