

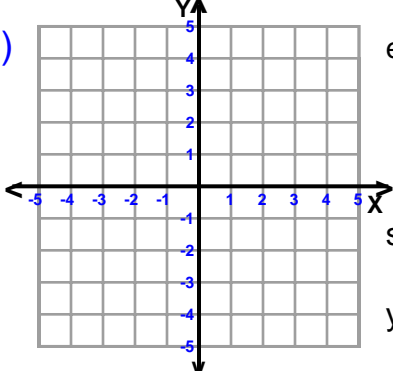
Name : _____

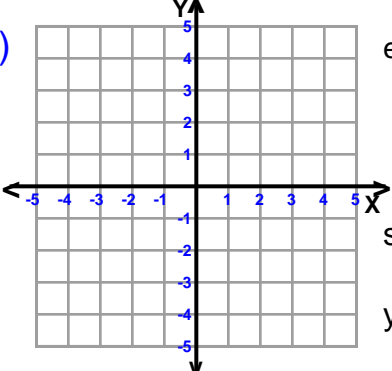
Score : _____

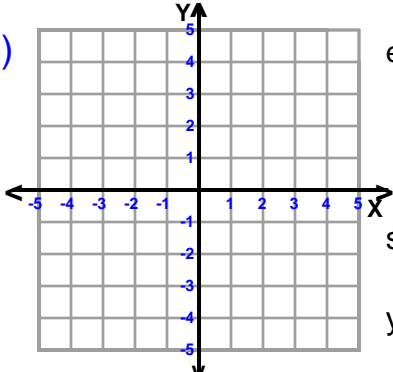
Teacher : _____

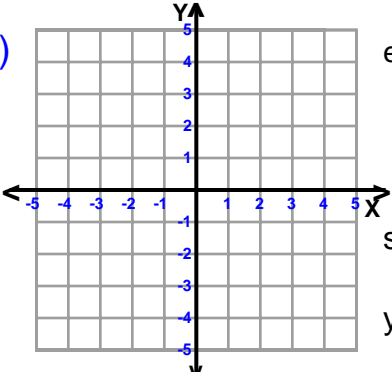
Date : _____

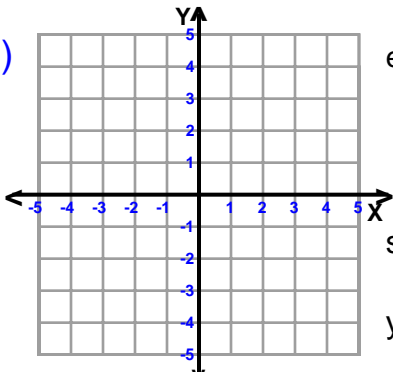
Sketch Each Line and Find the Slope and Y-intercept

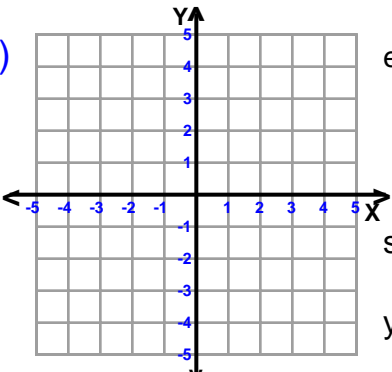
1)  equation $y = -x + 4$
slope (m) = _____
y-intercept = _____

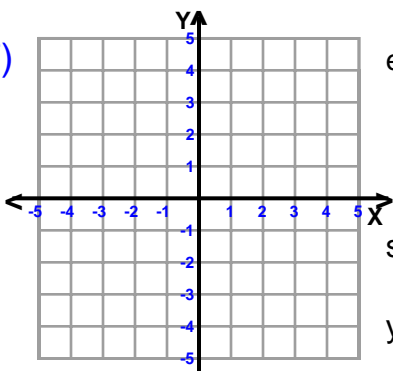
2)  equation $y = -4x + 4$
slope (m) = _____
y-intercept = _____

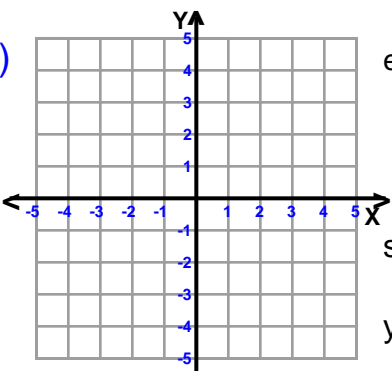
3)  equation $y = \frac{1}{3}x + 3$
slope (m) = _____
y-intercept = _____

4)  equation $y = -\frac{1}{3}x + 1$
slope (m) = _____
y-intercept = _____

5)  equation $y = -3x - 3$
slope (m) = _____
y-intercept = _____

6)  equation $y = \frac{3}{2}x + 3$
slope (m) = _____
y-intercept = _____

7)  equation $y = \frac{8}{3}x - 5$
slope (m) = _____
y-intercept = _____

8)  equation $y = -x + 2$
slope (m) = _____
y-intercept = _____



Name : _____

Score : _____

Teacher : _____

Date : _____

Sketch Each Line and Find the Slope and Y-intercept

