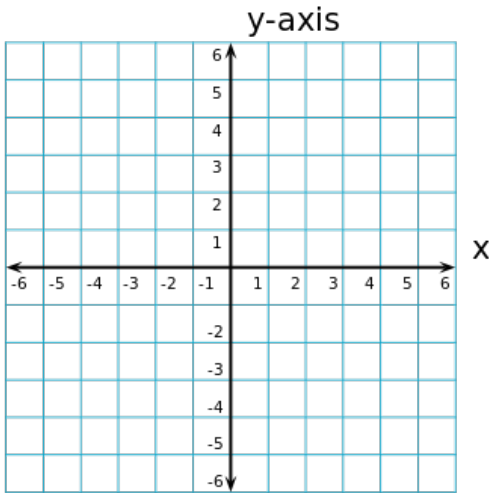


Name: _____

Date: _____ Pd: _____

MINI QUIZ

Graph $y = \frac{1}{2}x - 3$

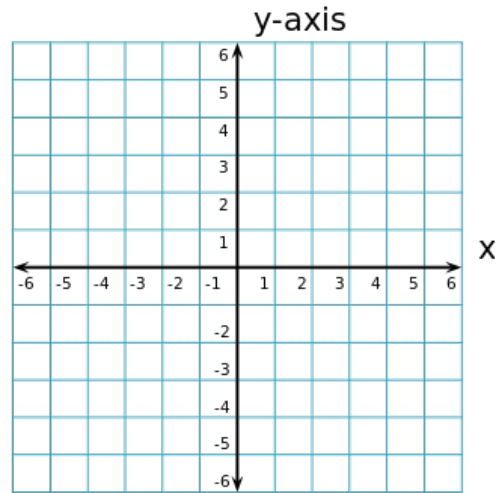


Name: _____

Date: _____ Pd: _____

MINI QUIZ

Graph $y = \frac{1}{2}x - 3$

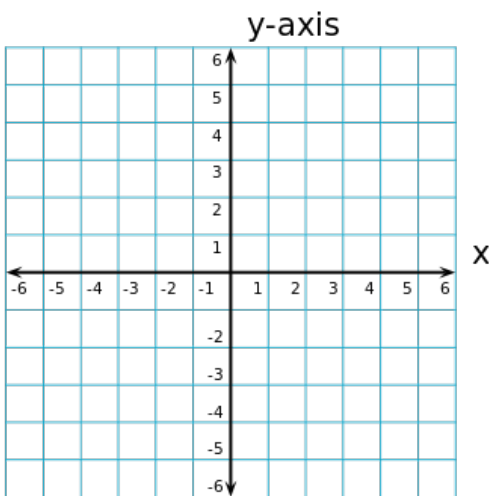


Name: _____

Date: _____ Pd: _____

MINI QUIZ

Graph $y = \frac{1}{2}x - 3$



Name: _____

Date: _____ Pd: _____

MINI QUIZ

Graph $y = \frac{1}{2}x - 3$

