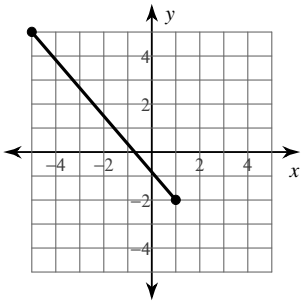


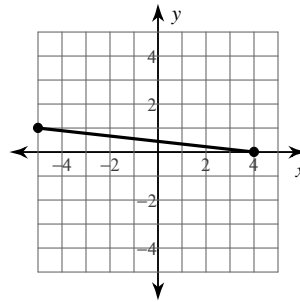
The Distance Formula

Find the distance between each pair of points. Round your answer to the nearest tenth, if necessary.

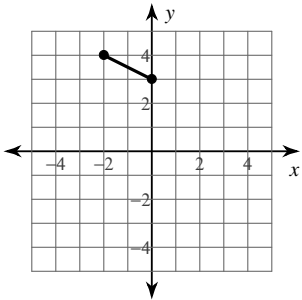
1)



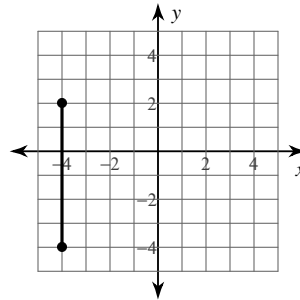
2)



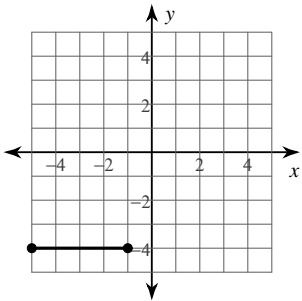
3)



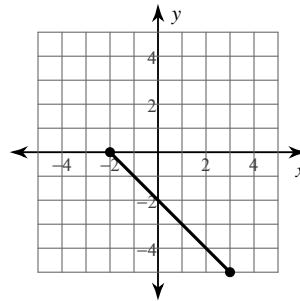
4)



5)



6)



7) (2, 3), (7, 4)

8) (2, 9), (-1, 4)