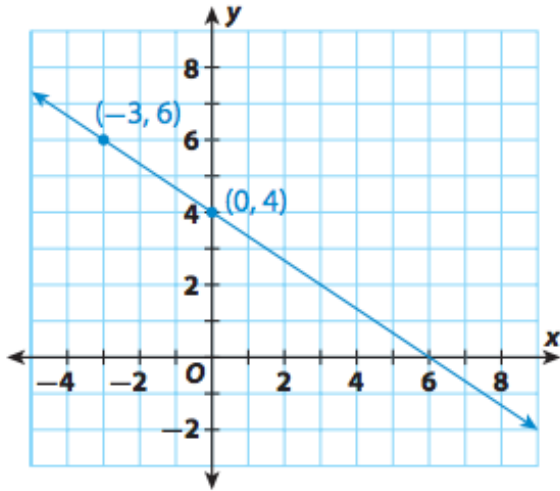


Name: _____

Pd _____ Date _____

Mini Quiz (5.1-5.3)

1)



Slope m : _____ y-intercept b : _____

Equation: _____

2)

X	-8	-4	0	4	8
y	-1	2	5	8	11

Slope m : _____ y-intercept b : _____

Equation: _____

3) **(-5, 2) & (0, 6)**

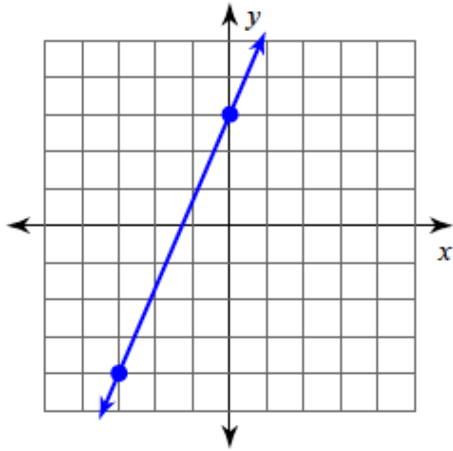
Slope m : _____ y-intercept b : _____

Equation: _____

Name: _____

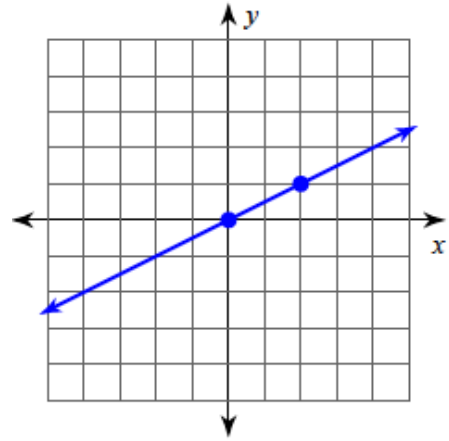
Pd _____ Date _____

Linear Equations - Graphs



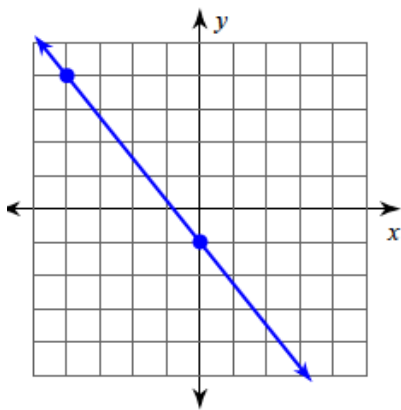
Slope m : _____ y-intercept b : _____

Equation: _____



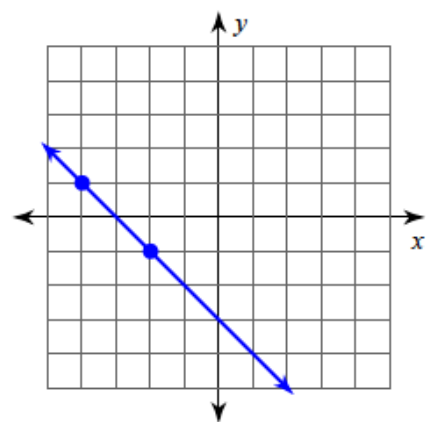
Slope m : _____ y-intercept b : _____

Equation: _____



Slope m : _____ y-intercept b : _____

Equation: _____



Slope m : _____ y-intercept b : _____

Equation: _____

Name: _____

Pd _____ Date _____

Linear Equations - Tables

x	-2	0	2	4
y	3	4	5	6

Slope m : _____ y-intercept b : _____

Equation: _____

x	-1	0	1	2
y	4	2	0	-2

Slope m : _____ y-intercept b : _____

Equation: _____

x	-1	1	3	5
y	1	5	9	13

Slope m : _____ y-intercept b : _____

Equation: _____

x	3	6	9	12
y	1	3	5	7

Slope m : _____ y-intercept b : _____

Equation: _____

Name: _____

Pd _____ Date _____

Linear Equations - 2 points

$(-2, 5)$ & $(0, 4)$

Slope m : _____ y-intercept b : _____

Equation: _____

$(0, -3)$ & $(4, 9)$

Slope m : _____ y-intercept b : _____

Equation: _____

$(-8, 0)$ & $(0, 6)$

Slope m : _____ y-intercept b : _____

Equation: _____

$(-6, 0)$ & $(0, -2)$

Slope m : _____ y-intercept b : _____

Equation: _____